

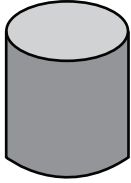
Name of Solid Shapes

Sheet 1



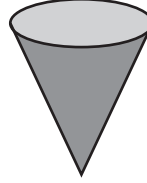
A) Choose the correct name of each shape.

1)



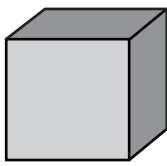
- Rectangular prism
 Cylinder
 Cone

2)




- Pyramid
 Sphere
 Cone

3)



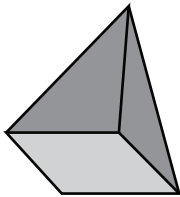
- Cube
 Rectangular prism
 Cylinder

4)



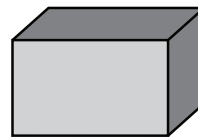
- Cylinder
 Sphere
 Cube

5)



- Rectangular prism
 Cylinder
 Pyramid

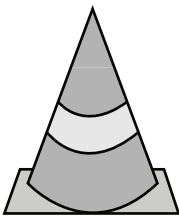
6)



- Cube
 Rectangular prism
 Cone

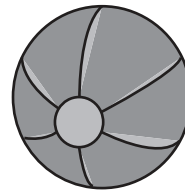
B) Choose the correct choice that best describes each object.

1)



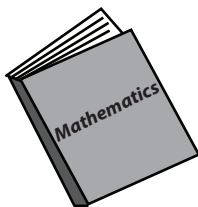
- Pyramid
 Cylinder
 Cone

2)



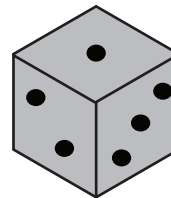
- Sphere
 Cube
 Cylinder

3)



- Rectangular prism
 Cube
 Pyramid

4)




- Cone
 Rectangular prism
 Cube

5)



- Cone
 Cylinder
 Sphere

6)



- Pyramid
 Rectangular prism
 Cone

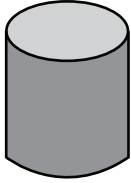
Name of Solid Shapes

Sheet 1



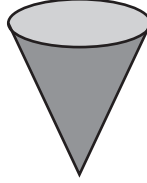
A) Choose the correct name of each shape.

1)



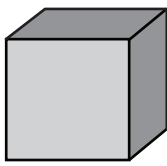
- Rectangular prism
 Cylinder
 Cone

2)




- Pyramid
 Sphere
 Cone

3)



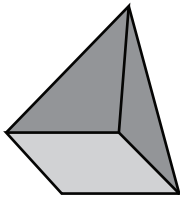
- Cube
 Rectangular prism
 Cylinder

4)



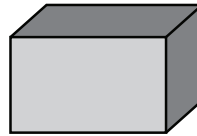
- Cylinder
 Sphere
 Cube

5)



- Rectangular prism
 Cylinder
 Pyramid

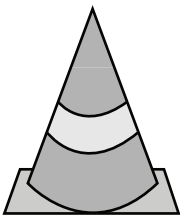
6)



- Cube
 Rectangular prism
 Cone

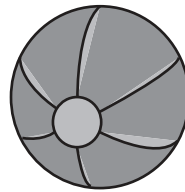
B) Choose the correct choice that best describes each object.

1)



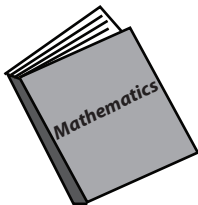
- Pyramid
 Cylinder
 Cone

2)



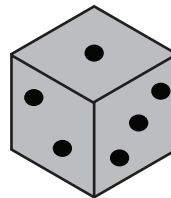
- Sphere
 Cube
 Cylinder

3)




- Rectangular prism
 Cube
 Pyramid

4)




- Cone
 Rectangular prism
 Cube

5)



- Cone
 Cylinder
 Sphere

6)



- Pyramid
 Rectangular prism
 Cone