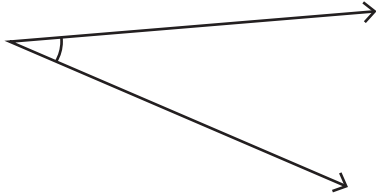


Measuring Angles

Difficult: S3

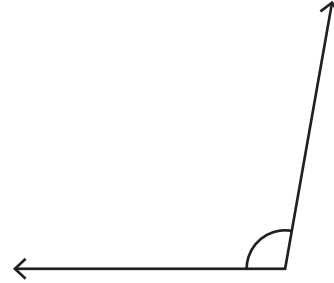
Measure each angle using protractor.

1)



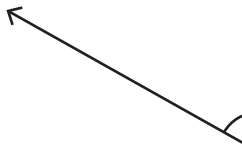
Angle : _____

2)

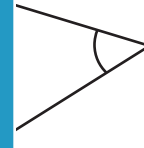


Angle : _____

3)



Angle : _____



Angle : _____

5)



Angle : _____



Angle : _____

PREVIEW

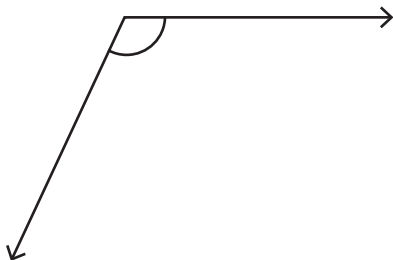
Access the largest collection of worksheets for just **\$19.95** per year!

Members, please log in to download this worksheet. **Log in**

Not a member? Please sign up to gain complete access. **Sign up**

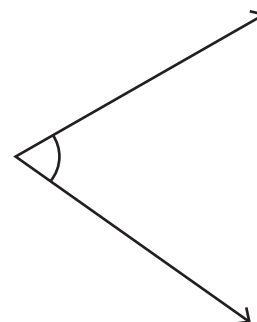
www.mathworksheets4kids.com

7)



Angle : _____

8)



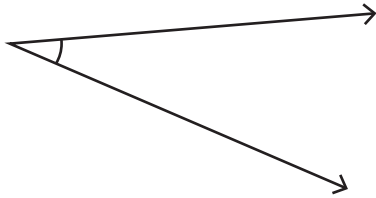
Angle : _____

Measuring Angles

Difficult: S3

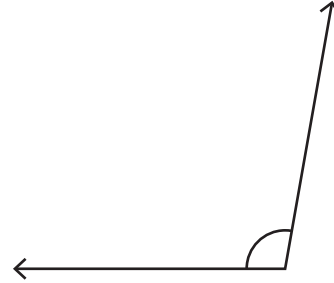
Measure each angle using protractor.

1)



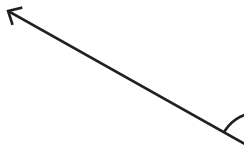
Angle : 30°

2)

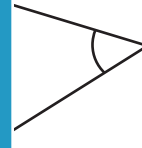


Angle : 100°

3)



Angle : 49°



Angle : 80°

5)

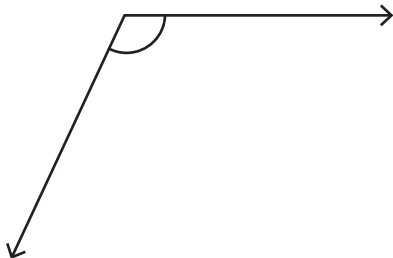


Angle : 115°



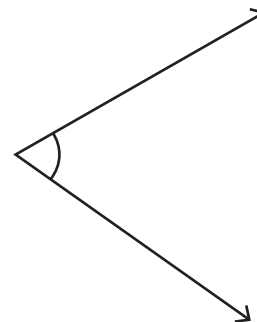
Angle : 65°

7)



Angle : 115°

8)



Angle : 65°

PREVIEW

Access the largest collection of worksheets for just **\$19.95** per year!

Members, please log in to download this worksheet.

Log in

Not a member? Please sign up to gain complete access.

Sign up

www.mathworksheets4kids.com