


Rectangle - Area & Perimeter

DS1

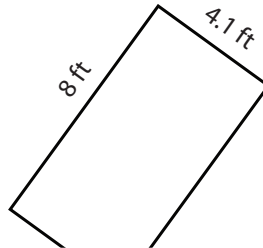
Find the area and perimeter of each rectangle.

1)

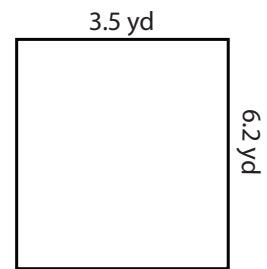


Area : _____
Perimeter : _____

2)



3)

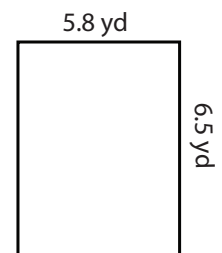


Area : _____
Perimeter : _____

4)




Area : _____
Perimeter : _____




Area : _____
Perimeter : _____

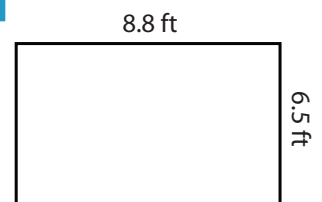
7)



Area : _____
Perimeter : _____



Area : _____
Perimeter : _____



Area : _____
Perimeter : _____

PREVIEW

Access the largest collection of
worksheets for just **\$19.95** per year!

Members, please
log in to
download this
worksheet.

Log in

Not a member?
Please sign up to
gain complete
access.

Sign up

www.mathworksheets4kids.com


Answer key

Rectangle - Area & Perimeter

DS1

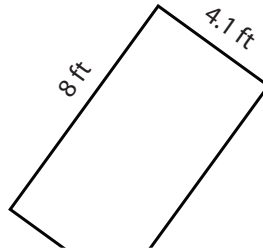
Find the area and perimeter of each rectangle.

1)



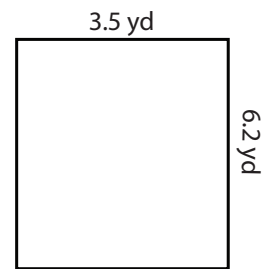
Area : 17.1 in²
Perimeter : 17.4 in

2)



Area : 21.7 yd²
Perimeter : 19.4 yd

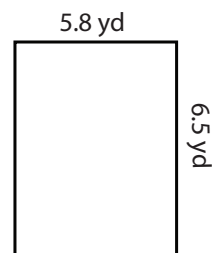
3)



4)

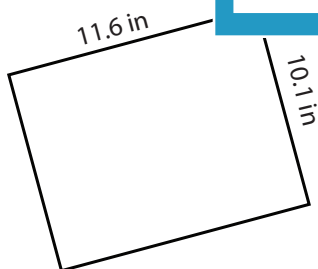


Area : 184.8 ft²
Perimeter : 55.6 ft




Area : 37.7 yd²
Perimeter : 24.6 yd

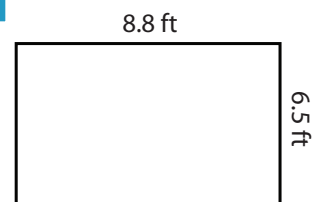
7)



Area : 117.16 in²
Perimeter : 43.4 in



Area : 31.6 yd²
Perimeter : 23.8 yd



Area : 57.2 ft²
Perimeter : 30.6 ft

PREVIEW

Access the largest collection of worksheets for just **\$19.95** per year!

Members, please log in to download this worksheet.

Log in

Not a member? Please sign up to gain complete access.

Sign up

www.mathworksheets4kids.com