

Capacity Estimation

Estimate the capacity of each object.

1)



- 20 L
- 2 L
- 200 mL

2)



- 3 L
- 30 mL
- 300 mL

3)



- 2.5 L
- 25 mL
- 250 mL

4)




- 50 mL
- 500 mL
- 5 L

5)




- 200 mL
- 20 mL
- 2 L

6)



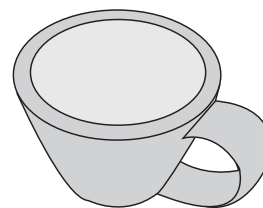
- 300 mL
- 30 L
- 3 L

7)



- 250 mL
- 25 L
- 2.5 mL

8)



- 10 L
- 10 mL
- 100 mL

Answer Key

Estimate the capacity of each object.

1)



- 20 L
- **2 L**
- 200 mL

2)



- 3 L
- 30 mL
- **300 mL**

3)



- 2.5 L
- 25 mL
- **250 mL**

4)




- 50 mL
- **500 mL**
- 5 L

5)




- **200 mL**
- 20 mL
- 2 L

6)



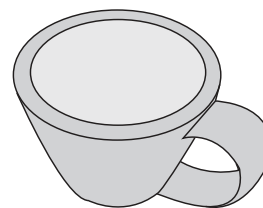
- 300 mL
- 30 L
- **3 L**

7)



- **250 mL**
- 25 L
- 2.5 mL

8)



- 10 L
- 10 mL
- **100 mL**