







Weight Estimation

Choose the object close to the given weight.



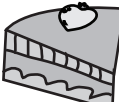
1) 3 grams

- 
- 
- 




2) 5 kilograms

- 
- 
- 


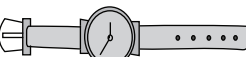

3) 10 grams

- 
- 
- 




4) 2 kilograms

- 
- 
- 




5) 40 grams

- 
- 
- 

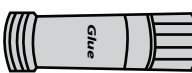


6) 35 grams

- 
- 
- 

7) 1.5 kilograms

- 
- 
- 




8) 3 kilograms

- 
- 
- 



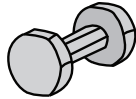
Answer Key

Choose the object close to the given weight.



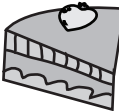
1) 3 grams

- 
- 
- 




2) 5 kilograms

- 
- 
- 


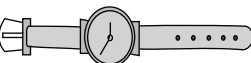

3) 10 grams

- 
- 
- 




4) 2 kilograms

- 
- 
- 




5) 40 grams

- 
- 
- 

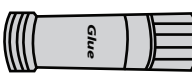

6) 35 grams

- 
- 
- 

7) 1.5 kilograms

- 
- 
- 

8) 3 kilograms

- 
- 
- 